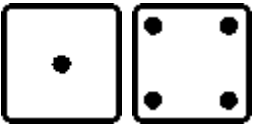
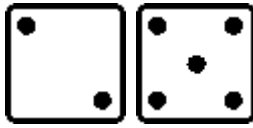
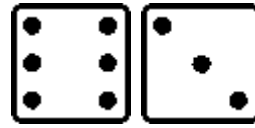
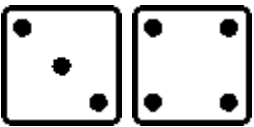

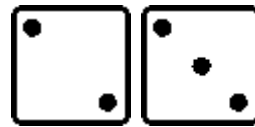

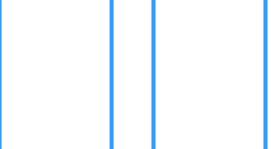
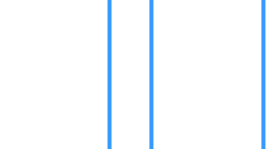
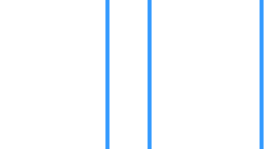






4. Compara. Lee las ecuaciones en voz alta utilizando "es menor que" y "es mayor que".

 $1 \square 4$	 $2 \square 5$	 $6 \square 3$
 $3 \square 4$	 $5 \square 1$	 $2 \square 3$

5. Dibuja pelotas. Escribe $<$ ó $>$.

			
$1 \square 4$	$4 \square 3$	$2 \square 5$	$1 \square 2$
			
$0 \square 4$	$5 \square 4$	$6 \square 2$	$2 \square 4$

6. Escribe $<$ ó $>$ entre los dos números.

$1 \square < 4$	$4 \square 5$	$2 \square 4$	$5 \square 3$	$0 \square 5$
$1 \square 2$	$3 \square 1$	$5 \square 4$	$4 \square 6$	$1 \square 5$
$3 \square 5$	$1 \square 0$	$2 \square 5$	$0 \square 2$	$2 \square 3$